

Ecris, pour chacune des figures, la fraction de la surface grisée.

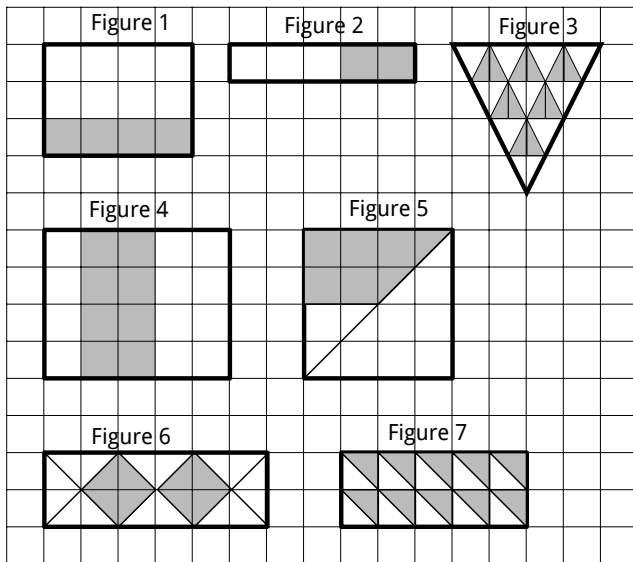


Figure 1:

Figure 2:

Figure 3

Figure 4

Figure 5:

Figure 6:

Figure 7:

Ecris, pour chacune des figures, la fraction de la surface grisée.

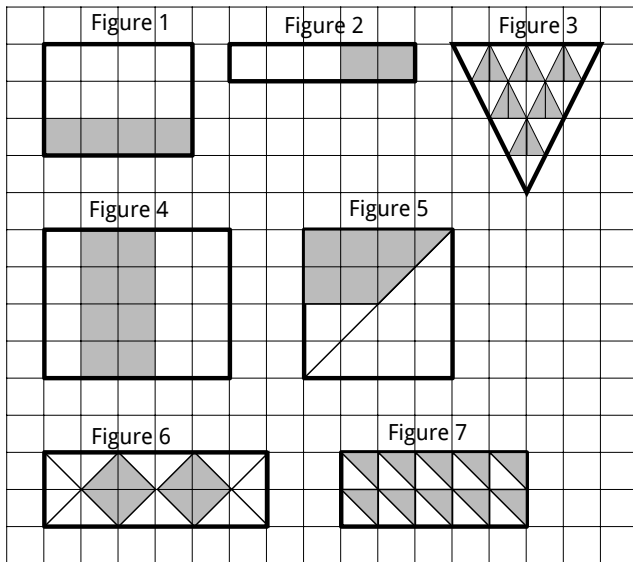


Figure 1:

Figure 2:

Figure 3

Figure 4

Figure 5:

Figure 6:

Figure 7:

Ecris, pour chacune des figures, la fraction de la surface grisée.

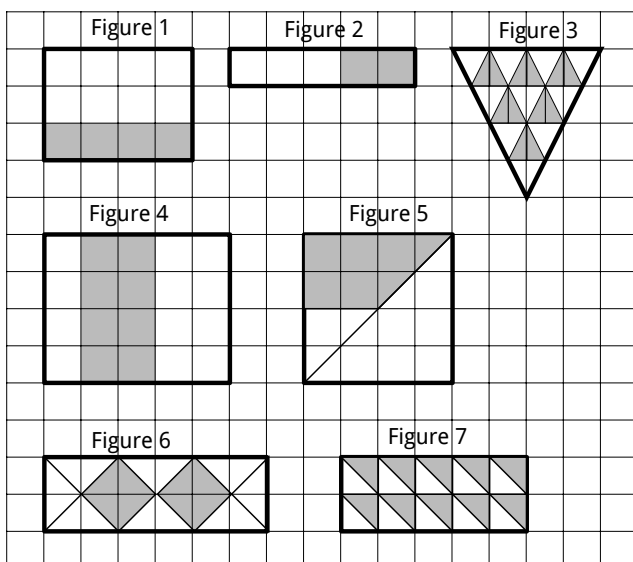


Figure 1:

Figure 2:

Figure 3

Figure 4

Figure 5:

Figure 6:

Figure 7: