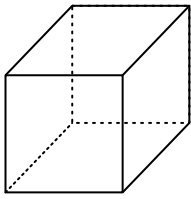


Groupe : | Date :

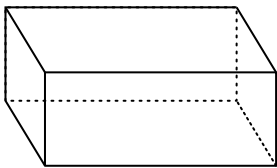
Exercice 1 _____ **Compter sur les volumes** 

- Le cube :



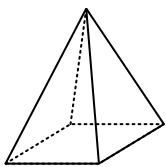
.....
.....
.....

- Le pavé droit :



.....
.....
.....

- La pyramide :

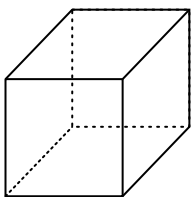


.....
.....
.....

Groupe : | Date :

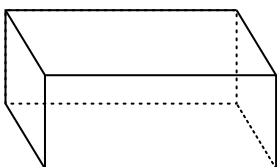
Exercice 1 _____ **Compter sur les volumes** 

- Le cube :



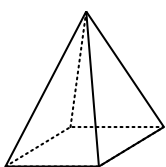
.....
.....
.....

- Le pavé droit :



.....
.....
.....

- La pyramide :



.....
.....
.....