
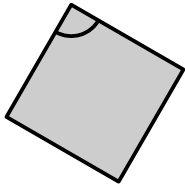


$$\text{Angle} = 180 - \frac{360}{3}$$



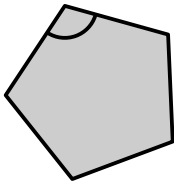
Triangle

$$\text{Angle} = 180 - \frac{360}{4}$$



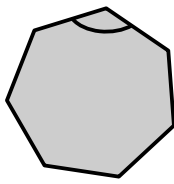
Carré

$$\text{Angle} = 180 - \frac{360}{5}$$



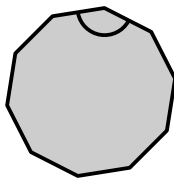
Pentagone

$$\text{Angle} = 180 - \frac{360}{7}$$



Heptagone

$$\text{Angle} = 180 - \frac{360}{10}$$



Décagone